
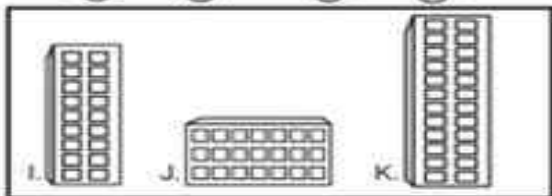

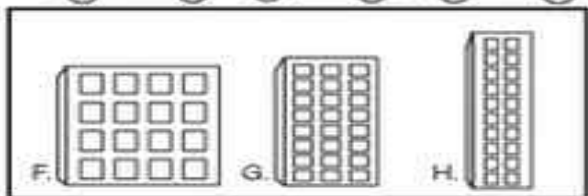
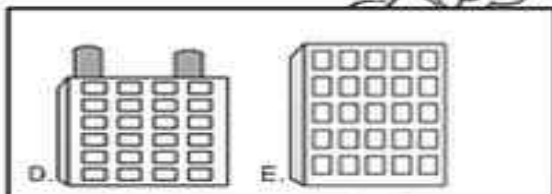
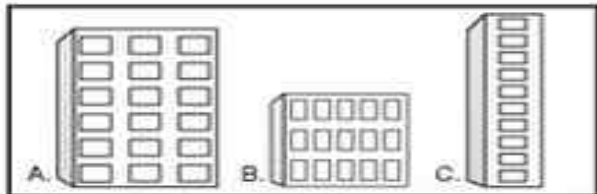


Name _____

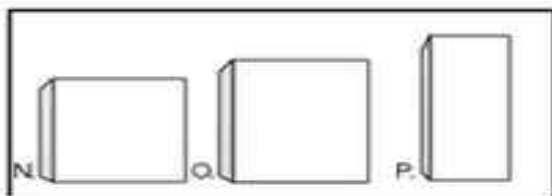
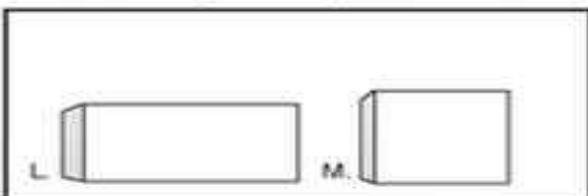
Multiplication

"Multipli-city"

How many windows must Pete Pigeon wash?
Look at the array of windows on each building.
On the car below each building, write the
multiplication fact the array shows.
Pete Pigeon has done the first one for you.



Now look at the multiplication fact on each car. Draw a matching array of windows on the building and complete the matching fact.



Bonus Box: Draw a building with an array of 14 windows. Write a matching multiplication fact.