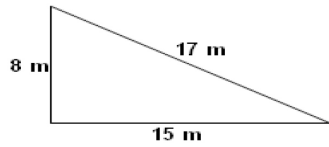


Student Name: \_\_\_\_\_

Score: \_\_\_\_\_

**Is it Right Angled Triangle?**

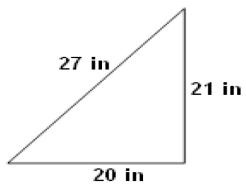
Check whether the given triangles are right angled triangle using Pythagorean rule:  
Work Space



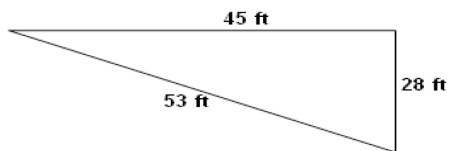
Answer:



Answer:



Answer:



Answer: