


Comparing Fractions

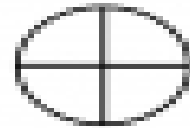
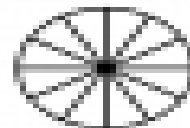
Shade and use >, <, or = to compare the fractions.



$$\frac{1}{2}$$

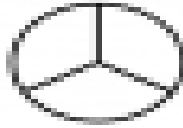
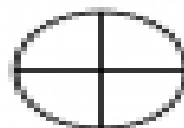
>

$$\frac{1}{3}$$



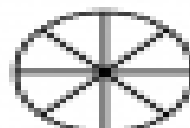
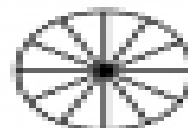
$$\frac{6}{12}$$

$$\frac{2}{4}$$



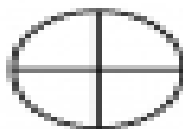
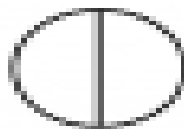
$$\frac{2}{4}$$

$$\frac{2}{3}$$



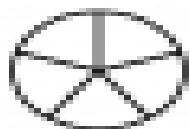
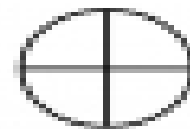
$$\frac{3}{12}$$

$$\frac{2}{8}$$



$$\frac{1}{2}$$

$$\frac{2}{4}$$



$$\frac{1}{4}$$

$$\frac{1}{5}$$