




Name: _____

Can you tell the time to the nearest 5 minutes?
Worksheet 1


1.




2.



3.



4.



5.



6.




7.




8.



9.



10.



11.



12.

