

Name _____


Date _____

Review: Total Value of a Group of Coins



In each set, add the value of the coins to find the total amount.
Draw a line to match each set to the correct amount.



35c




42c




78c


13c



81c



94c



67c

39c



Challenge: How many different ways can you show the value of 1 dollar? Use your real coins to make different sets of coins that equal 1 dollar.

