






Name: \_\_\_\_\_

**Worksheet #2**

Show the different ways you can make the money amounts. The first one is done for you.

				
.39 ¢	4		1	1
.39 ¢	4	1	3	
.07 ¢				
.07 ¢				
.13 ¢				
.13 ¢				
.13 ¢				
.23 ¢				
.23 ¢				
.23 ¢				
.05 ¢				
.05 ¢				

Score:    /10