

Name : \_\_\_\_\_

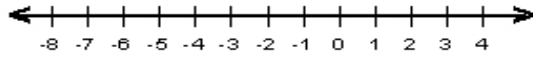
Score : \_\_\_\_\_

Teacher : \_\_\_\_\_

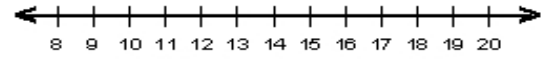
Date : \_\_\_\_\_

### Solve and Graph the Inequalities

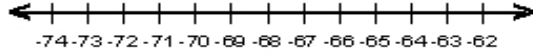
1)  $24 \geq -4p$



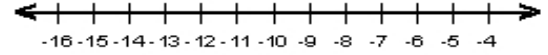
6)  $10 > -5 + b$



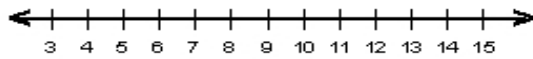
2)  $-13 \geq \frac{q}{5}$



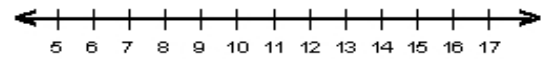
7)  $-7 < \frac{c}{2}$



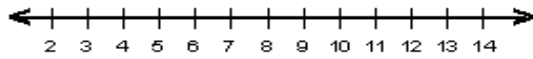
3)  $-63 \leq -7s$



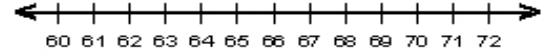
8)  $7 < v - 6$



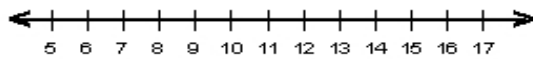
4)  $13 \leq q + 4$



9)  $\frac{x}{5} > 13$



5)  $-4 + a \geq 9$



10)  $\frac{w}{4} > 13$

