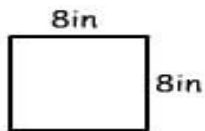


Print


Perimeter

Name: _____

Calculate the perimeter of these shapes:



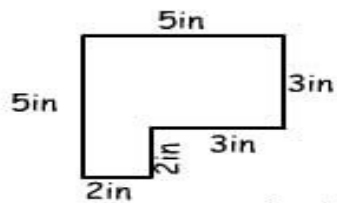
perimeter = ___ in



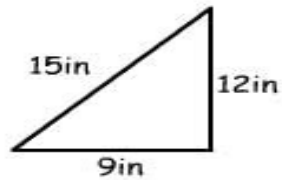
perimeter = ___ in



perimeter = ___ in



perimeter = ___ in



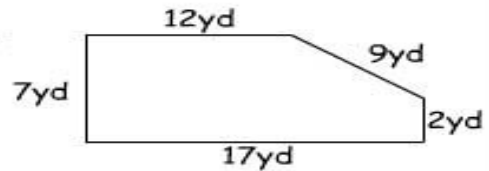
perimeter = ___ in

Working Mathematically

- 1) Henry the ant walked around this shape twice.
How far did he walk? _____



- 2) How many yards of fencing does Sally need for her paddock? _____



- 3) What is the perimeter of a square with 12in sides? _____