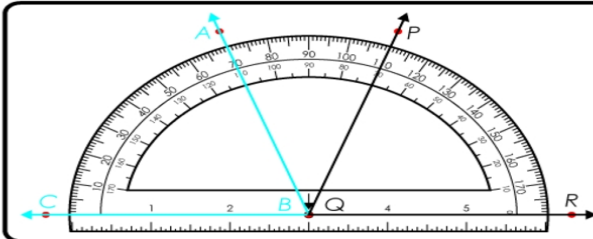


Name: _____

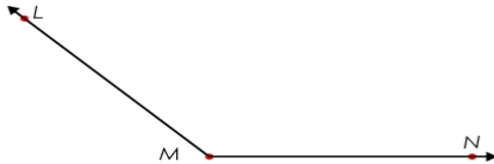
Measuring with a Protractor



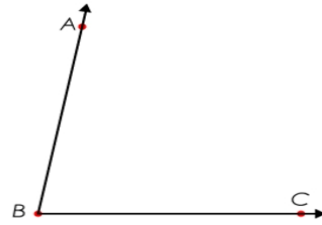
The protractor's arrow and pen hole is placed on the angle's vertex. The 0° line is placed over one side of the angle. If the 0° line is used on the left of the pen hole, use the outside edge for the measure. If the 0° line is used on the right of the pen hole, use the the inside edge. Read the measure where the other leg of the angle intersects the protractor.

$\angle ABC$ and $\angle PQR$ both measure 70° .

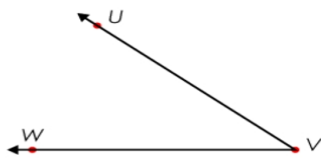
Using a protractor, measure the angles.



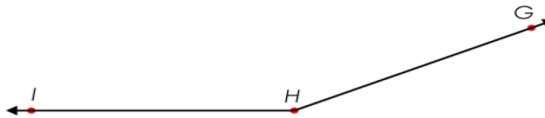
$\angle LMN =$ _____



$\angle ABC =$ _____



$\angle UVW =$ _____



$\angle GHI =$ _____