



Name: _____

CCSS 2.MD.1 Measure the length of an objectprimer

Measurement

 Directions: How many ladybugs long is each object?

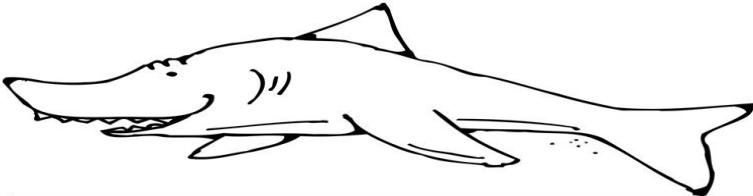
1. _____ ladybugs long



2. _____ ladybugs long



3. _____ ladybugs long



Graphics/fonts copyright DJ Inkers. www.djinkers.com