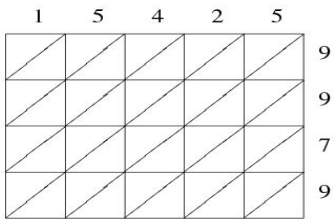
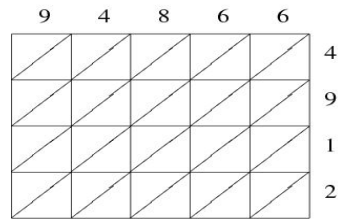


Lattice Multiplication (A)

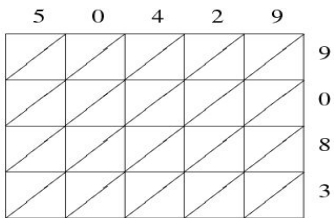
Use lattice multiplication to find each product.



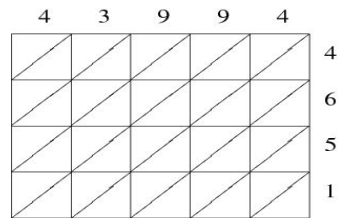
$15425 \times 9979 = \underline{\hspace{2cm}}$



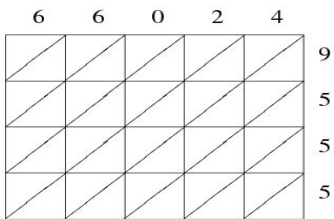
$94866 \times 4912 = \underline{\hspace{2cm}}$



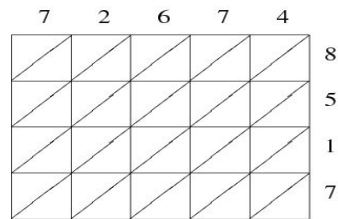
$50429 \times 9083 = \underline{\hspace{2cm}}$



$43994 \times 4651 = \underline{\hspace{2cm}}$



$66024 \times 9555 = \underline{\hspace{2cm}}$



$72674 \times 8517 = \underline{\hspace{2cm}}$