



**Parallel Lines and Transversals**

Identify each pair of angles as corresponding, alternate interior, alternate exterior, or consecutive interior.


17



20




18




21



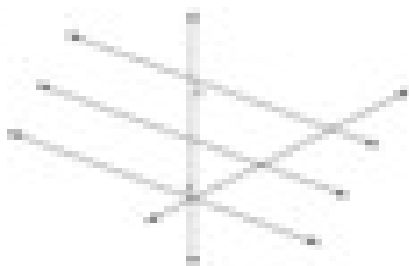
19



22



23



24

