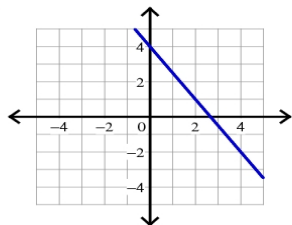


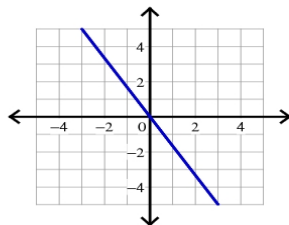
### Writing Linear Equations

Write the slope-intercept form of the equation of each line.

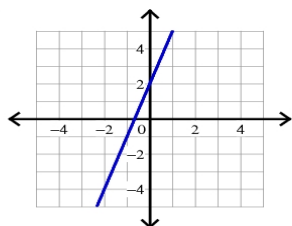
1)



2)



3)



4)

