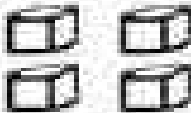






# Counting On With Blocks

Name \_\_\_\_\_

Directions: Cut out the numbers at the bottom of the page. "Count on" to solve each addition problem. Use the numbers in the correct place.

<b>10</b>	<b>+</b>		<b>=</b>	<input type="text"/>
<b>10</b>	<b>+</b>		<b>=</b>	<input type="text"/>
<b>10</b>	<b>+</b>		<b>=</b>	<input type="text"/>
<b>10</b>	<b>+</b>		<b>=</b>	<input type="text"/>
<b>10</b>	<b>+</b>		<b>=</b>	<input type="text"/>

K-CC.3.K-OA.1 & K-MF.2 Teacher Time

<b>16</b>	<b>14</b>	<b>15</b>	<b>12</b>	<b>13</b>
-----------	-----------	-----------	-----------	-----------