

Name : _____

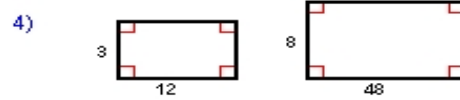
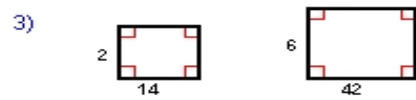
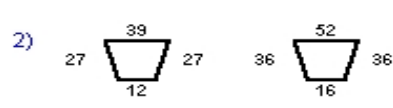
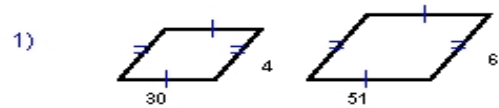
Score : _____

Teacher : _____

Date : _____

Similar Polygons

Determine whether the polygons are similar.



Each polygon pair is similar. Find the scale factor of the smaller shape to the biggest shape.

