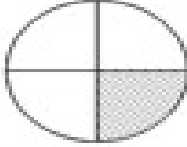
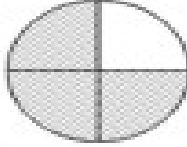




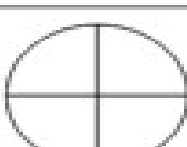
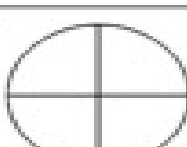

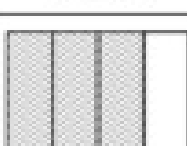




Name _____

1.  = $\frac{\quad}{\quad}$	7.  = $\frac{\quad}{\quad}$
2.  = $\frac{2}{4}$	8.  = $\frac{1}{4}$
3.  = $\frac{\quad}{\quad}$	9.  = $\frac{\quad}{\quad}$
11.  = $\frac{1}{4}$	10.  = $\frac{3}{4}$
5.  = $\frac{\quad}{\quad}$	11.  = $\frac{\quad}{\quad}$
6.  = $\frac{2}{4}$	12.  = $\frac{3}{4}$