

ADD Arithmetic Developed Daily

Name _____



19

Match the numbers with their names

10

forty

60

seventy

50

sixty

80

ten

40

fifty

70

eighty

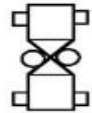
Phil had 6 shirts. His mother bought him 5 more. How many shirts did Phil have in all?

Thought _____

Information _____

Plan _____

Solution _____



© GROW Publications

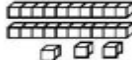

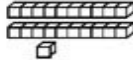
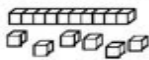
ADD Arithmetic Developed Daily

Name _____



20

How many in each set?



Concept Corner

You have 3 rods and 6 units. What else do you need to show 47?

Caroline had some rabbits. She sold 8 and had 5 left. How many did she have to begin with?

Thought _____

Information _____

Plan _____

Solution _____



© GROW Publications

ADD Arithmetic Developed Daily

Name _____



21

$$\begin{array}{r} 32 \\ +12 \\ \hline \end{array}$$

$$\begin{array}{r} 43 \\ +25 \\ \hline \end{array}$$

$$\begin{array}{r} 25 \\ +14 \\ \hline \end{array}$$

$$\begin{array}{r} 37 \\ +42 \\ \hline \end{array}$$

$$\begin{array}{r} 51 \\ +37 \\ \hline \end{array}$$

$$\begin{array}{r} 33 \\ +52 \\ \hline \end{array}$$

Marly has some stamps. 18 of them are from the U.S. and 6 of them are from other countries. How many stamps does Marly have in all?

Thought _____

Information _____

Plan _____

Solution _____



$$\underline{\quad} - \underline{\quad} = 2$$



© GROW Publications