

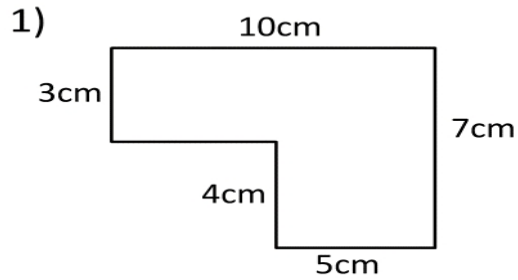
Name \_\_\_\_\_

Date \_\_\_\_\_



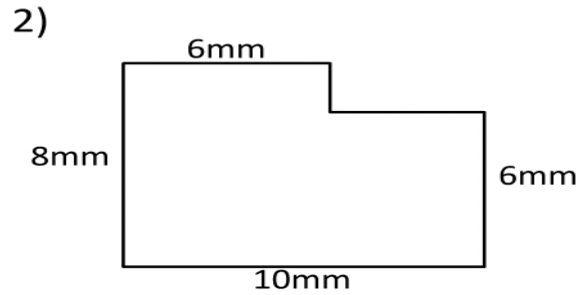
## AREA AND PERIMETER SHEET 4

Work out the area and perimeter of the following shapes by finding the missing sides. The shapes are not to scale.



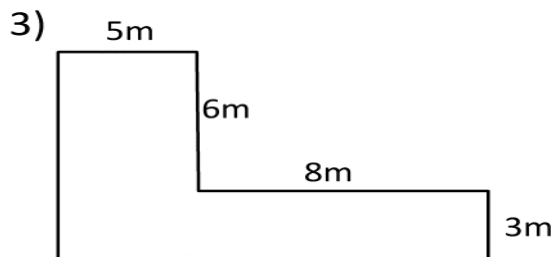
Area = \_\_\_\_\_ square cm (cm<sup>2</sup>)

Perimeter = \_\_\_\_\_ m



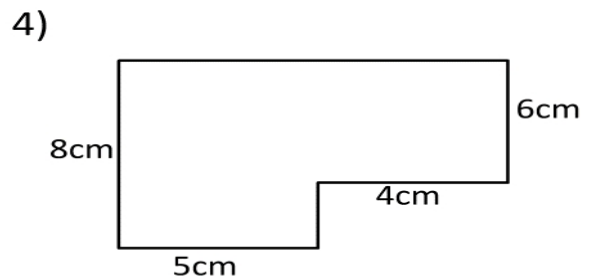
Area = \_\_\_\_\_ square mm (mm<sup>2</sup>)

Perimeter = \_\_\_\_\_ mm



Area = \_\_\_\_\_ square m (m<sup>2</sup>)

Perimeter = \_\_\_\_\_ m



Area = \_\_\_\_\_ square cm (cm<sup>2</sup>)

Perimeter = \_\_\_\_\_ cm