


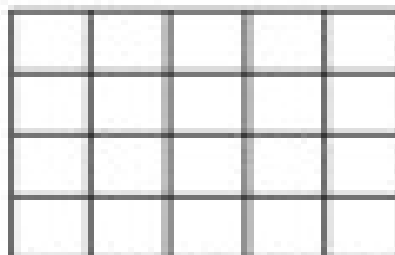
Name: _____

Finding Perimeter


Directions: Determine the perimeter of each shape by counting the blocks around the outside.




The perimeter of this shape is _____ sq. cm.



The perimeter of this shape is _____ sq. ft.



The perimeter of this shape is _____ sq. in.



The perimeter of this shape is _____ sq. ft.