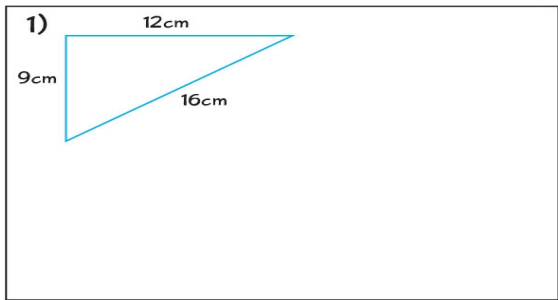
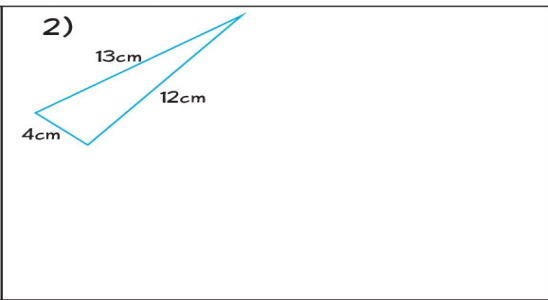
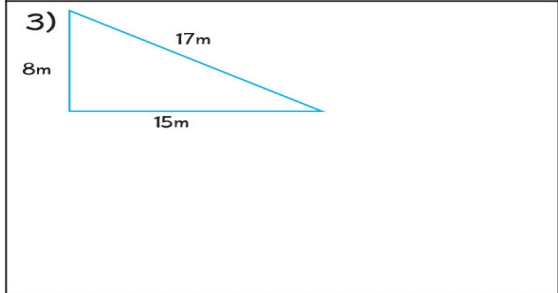
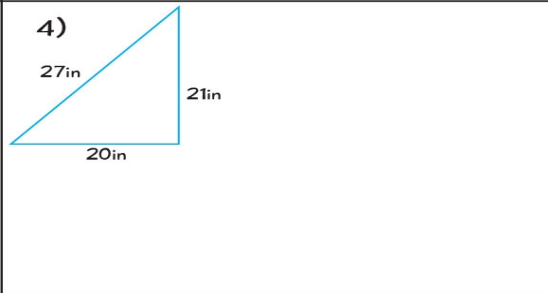
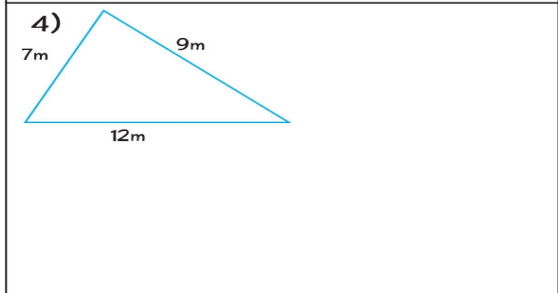
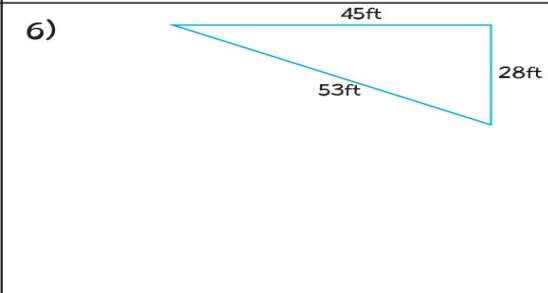


8th grade
GEOMETRY

Name: _____

Date: _____

Check whether the given triangles are right angled triangle using pythagorean rule.

<p>1)</p>  <p>9cm</p> <p>12cm</p> <p>16cm</p>	<p>2)</p>  <p>4cm</p> <p>13cm</p> <p>12cm</p>
<p>3)</p>  <p>8m</p> <p>17m</p> <p>15m</p>	<p>4)</p>  <p>27in</p> <p>21in</p> <p>20in</p>
<p>4)</p>  <p>7m</p> <p>12m</p> <p>9m</p>	<p>6)</p>  <p>45ft</p> <p>53ft</p> <p>28ft</p>