

11 The circle shows $\frac{1}{4}$ shaded.
Which fractional part of the circles
A, B, C or D is equal to $\frac{1}{4}$?



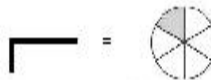
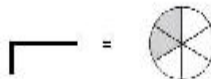

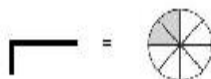
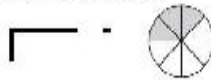
$$\frac{1}{4} =$$



Write the division equivalent for each fraction.

Write the fraction for each circle.

Fill in the boxes for each circle



12 $\frac{1}{2} + \frac{2}{4} =$

$\frac{1}{2}$ $+$ $\frac{2}{4}$ $=$ $\frac{\quad}{\quad}$?

A $\frac{6}{6} =$ $=$ $\frac{\quad}{\quad} =$

B $\frac{2}{6} =$ $=$ $\frac{\quad}{\quad} =$

C $\frac{2}{3} =$ $=$ $\frac{\quad}{\quad} =$

D $\frac{3}{4} =$ $=$ $\frac{\quad}{\quad} =$