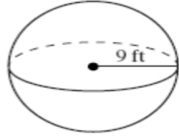


Name: _____

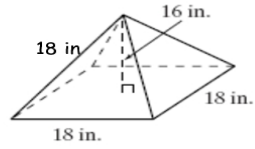
Volume: Pyramids, Cones, Spheres

Cone and Pyramid: $V = \frac{1}{3}Bh$ Sphere = $\frac{4}{3}\pi r^3$

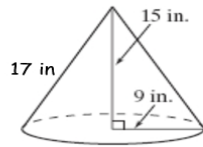
1.) Find Volume.



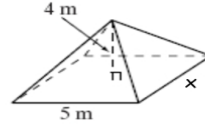
2.) Find Volume.



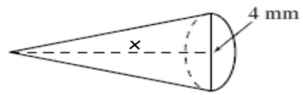
3.) Find Volume.



4.) Find x if Volume = $60m^3$



5.) Find x if Volume = $25.12mm^3$



6.) Find x if Volume = 904.32

