

NAME _____


PERIOD _____

VALUE SCALE

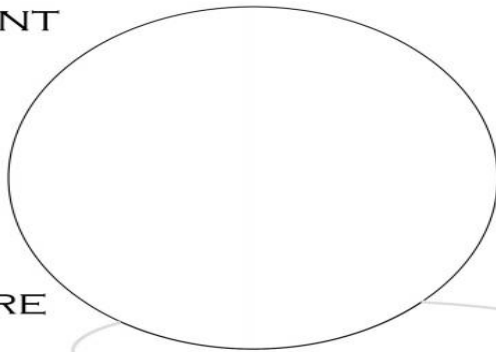


DARK

LIGHT



GRADIENT



SPHERE

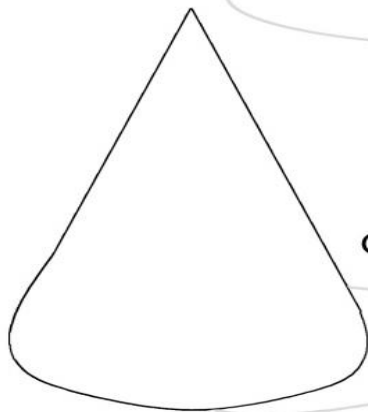
Gradient: _____/10

Sphere: _____/10

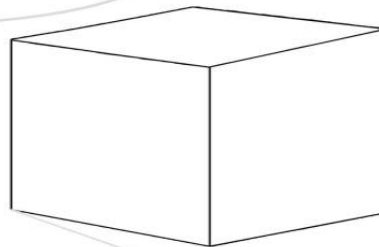
Cube: _____/10

Cone: _____/10

Overall: _____/40



CONE



CUBE

DARK



LIGHT

