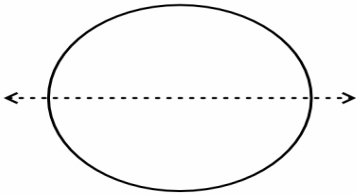


Name _____ Date _____

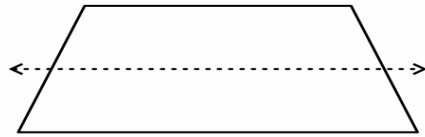
FIND THE SYMMETRY!

Look at each symmetry lines below. Is the dotted line on each shape a line of symmetry? Circle yes or no.

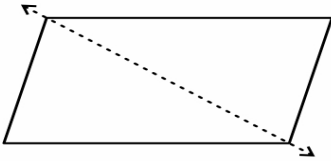
YES / NO



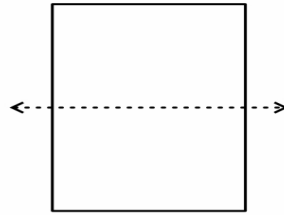
YES / NO



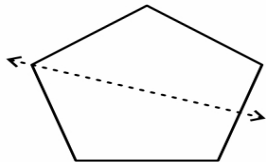
YES / NO



YES / NO



YES / NO



YES / NO

