

Name : _____

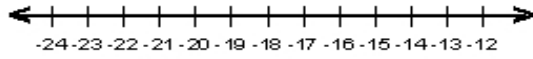
Score : _____

Teacher : _____

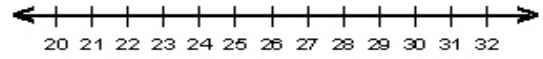
Date : _____

Solve the Inequalities

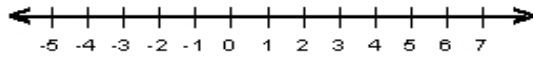
1) $v + 2 > -19$



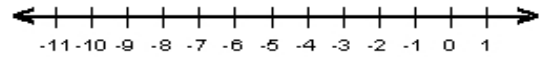
6) $19 \leq -5 + d$



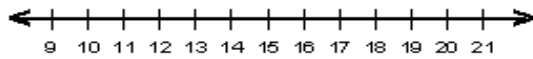
2) $n - 8 < -8$



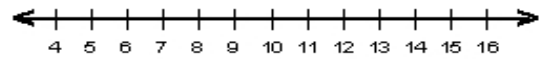
7) $-16 \leq c - 7$



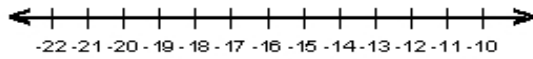
3) $9 < x - 2$



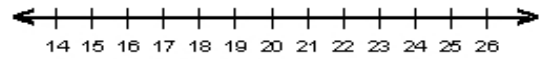
8) $6 \geq h - 1$



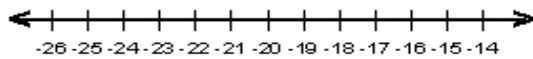
4) $y + 5 < -13$



9) $j - 8 > 15$



5) $5 + g \leq -13$



10) $5 \geq -9 + w$

