









Light and Dark Sources



Name _____ Date _____

1. Look at the things below. Are they light sources?

			
Lamp	Tooth	Moon	Curtain
			
Sun	Moon	Candle	Eyes

2. Now cut out the four light sources and rank them in order.

Brightest	Very bright	Quite bright	Least bright