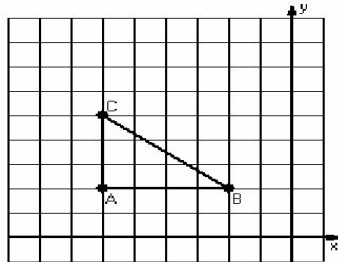


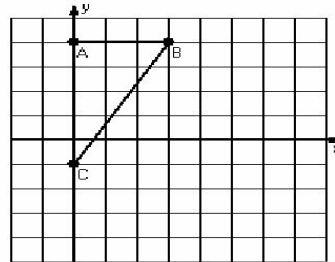
Reflections (F)

Instructions: Draw and label the reflected image for each triangle.
Draw the reflection line.

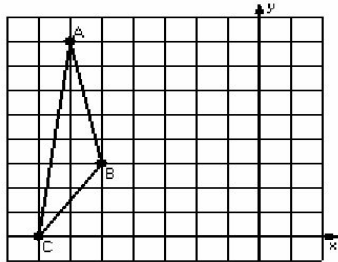
1) Reflection $x = -3$



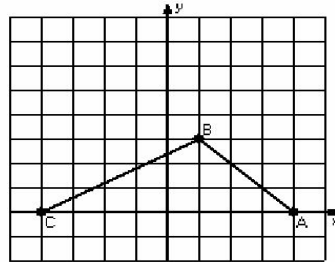
2) Reflection $y = 0$



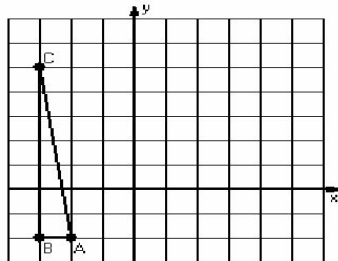
3) Reflection $x = -4$



4) Reflection $y = 1$



5) Reflection $x = 1$



6) Reflection $y = 4$

