

Name : \_\_\_\_\_

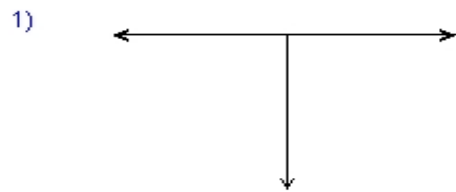
Score : \_\_\_\_\_

Teacher : \_\_\_\_\_

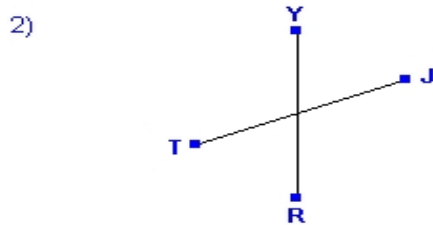
Date : \_\_\_\_\_

### Perpendicular Lines

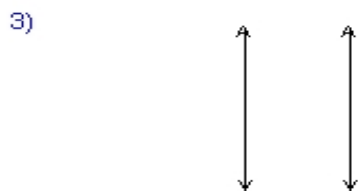
State whether the given pair of lines are parallel.



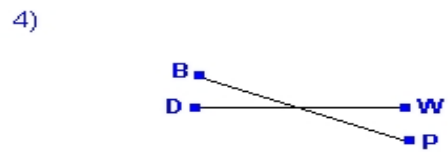
Answer: \_\_\_\_\_



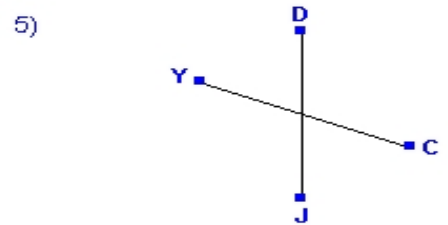
Answer: \_\_\_\_\_



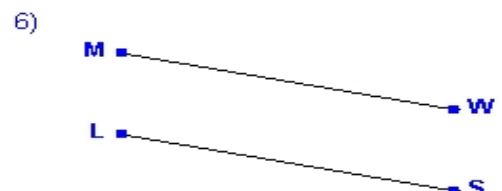
Answer: \_\_\_\_\_



Answer: \_\_\_\_\_



Answer: \_\_\_\_\_



Answer: \_\_\_\_\_

