



# What's the time?


Draw the hands on the clocks




It's four o'clock.




It's half past seven.




It's half past three.




It's eleven o'clock.




It's half past ten.




It's eight o'clock.




It's two o'clock.




It's half past five.




It's six o'clock.



It's half past nine.



It's five o'clock.



It's half past twelve.