













### Correct Amount?

Name: \_\_\_\_\_

Count the coins. If the answer is correct, put a check mark in the box. If not, put an X.

1.  <u>51€</u> <input checked="" type="checkbox"/>	2.  <u>21€</u> <input type="checkbox"/>	3.  <u>91€</u> <input type="checkbox"/>
4.  <u>31€</u> <input type="checkbox"/>	5.  <u>7€</u> <input type="checkbox"/>	6.  <u>34€</u> <input type="checkbox"/>
7.  <u>35€</u> <input type="checkbox"/>	8.  <u>68€</u> <input type="checkbox"/>	9.  <u>80€</u> <input type="checkbox"/>
10.  <u>37€</u> <input type="checkbox"/>	11.  <u>73€</u> <input type="checkbox"/>	12.  <u>43€</u> <input type="checkbox"/>