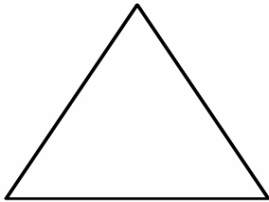


Name _____ Date _____

INVESTIGATING SYMMETRY


Investigate each shape below and write its name, number of sides, and line of symmetry!



Name

Sides

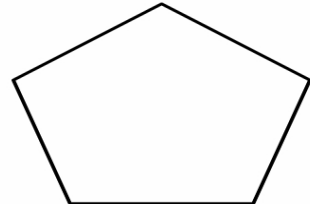
Lines of Symmetry



Name

Sides

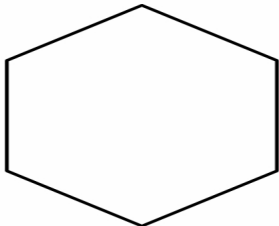
Lines of Symmetry



Name

Sides

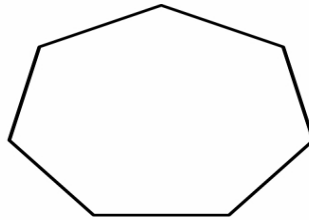
Lines of Symmetry



Name

Sides

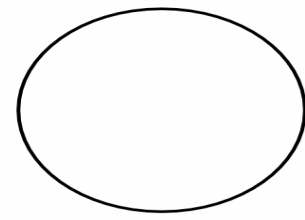
Lines of Symmetry



Name

Sides

Lines of Symmetry



Name

Sides

Lines of Symmetry