









PENNIES AND NICKELS

Name: _____ Date: _____

Circle the amount of money for each set of coins.

	<p>15¢</p> <p>3¢</p>
	<p>15¢</p> <p>20¢</p>
	<p>9¢</p> <p>8¢</p>
	<p>9¢</p> <p>13¢</p>

Write the amount of money for each set of coins with the correct label.

	<p>_____</p>
	<p>_____</p>
	<p>_____</p>
	<p>_____</p>