
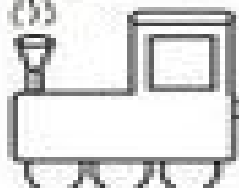


Name _____ Date _____

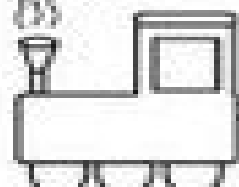


Write each missing number.

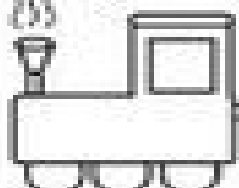
1								10
---	--	--	--	--	--	--	--	----



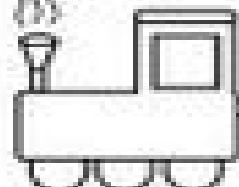
11								20
----	--	--	--	--	--	--	--	----



21								30
----	--	--	--	--	--	--	--	----



31								40
----	--	--	--	--	--	--	--	----



41								50
----	--	--	--	--	--	--	--	----