





Print Worksheet

Name: _____

Date: _____

Litres to Millilitres

Convert each container's capacity from litres to millilitres.

0.75L  _____ mL 1L  _____ mL 0.25L  _____ mL 2.250L  _____ mL

Millilitres to Litres

Convert each container's capacity from millilitres to litres.

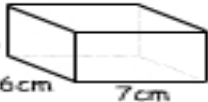

725mL  _____ L 4500mL  _____ L 250mL  _____ L 5250mL  _____ L

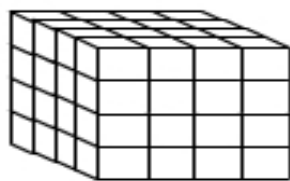
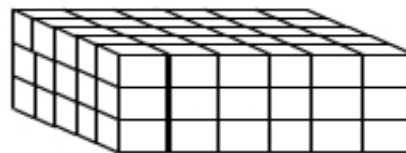
Total Volume

Calculate the total volume these of containers.

 25mL each  5100mL  8L total volume = _____ mL

Calculating Volume

 volume = _____ cm³  volume = _____ cm³

Volume of 3D Stacksvolume = _____ cm³volume = _____ cm³