




Name: _____

Can you tell the time to the nearest 5 minutes?
Worksheet 1


1




2




3



4



5



6




7




8



9



10



11



12

