

Name : _____

Score : _____

Teacher : _____

Date : _____


What is the Fraction of the Shaded Area ?






















Shade the Figure with the Indicated Fraction.



$\frac{1}{4}$



$\frac{2}{6}$



$\frac{6}{8}$



$\frac{2}{5}$



$\frac{1}{6}$




$\frac{4}{8}$




$\frac{3}{4}$



$\frac{3}{8}$



$\frac{2}{4}$



$\frac{1}{5}$