

Name _____

CCSS 2.NBT.1 Understand place value

Mixed Place Value Review

⇒ Follow the directions for each problem.

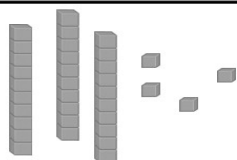
- 1. Shade in the number with 4 tens and 3 ones.
- 2. Shade in the number with 8 ones and 3 tens.
- 3. Shade in the number with 1 ten and 4 ones.
- 4. Shade in the number with 6 tens and 1 one.
- 5. Shade in the number with 8 tens and 4 ones.

1	2	3	4	5	6	7	8	9	10
11	12	13	14	15	16	17	18	19	20
21	22	23	24	25	26	27	28	29	30
31	32	33	34	35	36	37	38	39	40
41	42	43	44	45	46	47	48	49	50
51	52	53	54	55	56	57	58	59	60
61	62	63	64	65	66	67	68	69	70
71	72	73	74	75	76	77	78	79	80
81	82	83	84	85	86	87	88	89	90
91	92	93	94	95	96	97	98	99	100

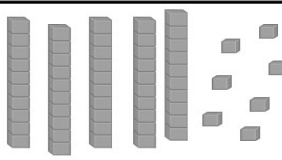
⇒ Write the value of the underlined digit.

53 _____ 64 _____ 72 _____ 94 _____ 19 _____


24 _____ 17 _____ 38 _____ 47 _____ 83 _____



___ tens + ___ ones = _____



___ tens + ___ ones = _____



___ tens + ___ ones = _____