


# Lets make Ten!

Trace the number, fill in the blanks, and draw to complete the frames!



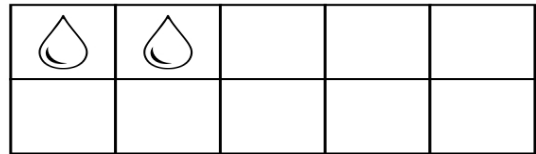
$$5 + \underline{\quad} = 10$$



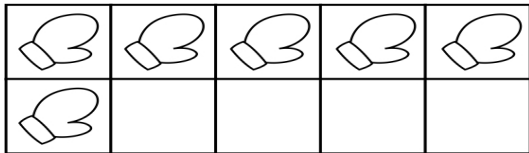
$$3 + \underline{\quad} = 10$$



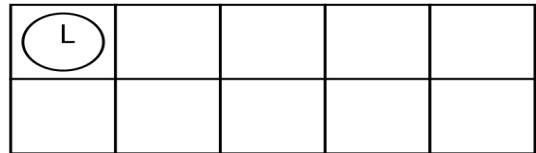
$$4 + \underline{\quad} = 10$$



$$2 + \underline{\quad} = 10$$



$$6 + \underline{\quad} = 10$$



$$1 + \underline{\quad} = 10$$