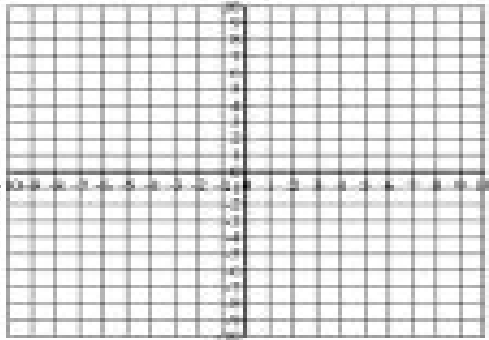


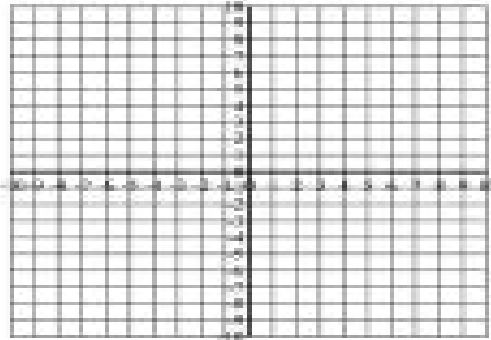
Graphing Linear Equations (F)

Graph each line.


$$y = (-5/4)x + 7$$



$$y = (5/4)x + 2$$



$$y = (-1/5)x - 9$$



$$y = (3/4)x + 7$$

