

Name \_\_\_\_\_ Date \_\_\_\_\_

Place Value Practice

Directions: Write the place-value position for the following digits in 90,427,516,038.

1. 8

2. 6

3. 4

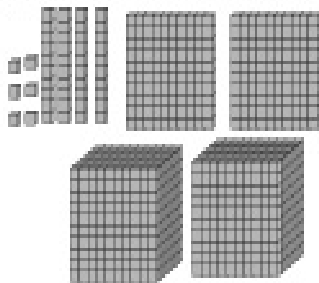
4. 2

5. 9

6. 5


Directions: Write the number of blocks in each set.

7.




\_\_\_\_\_ blocks

8.



\_\_\_\_\_ blocks

9.



\_\_\_\_\_ blocks

Directions: Solve the math problems.

10.  $900 + 4 =$

11.  $700 + 90 + 2 =$

12.  $2000 + 600 + 70 + 3 =$

13.  $800 + 30 + 8 =$

14.  $9000 + 400 + 1 =$

15.  $300 + 30 + 3 =$

16.  $500 + 90 + 4 =$

17.  $600 + 70 + 7 =$