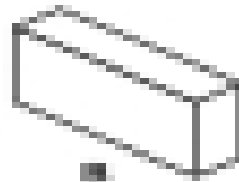




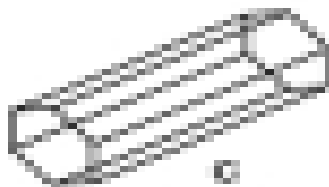
3.11.1. Classifying Solids and Nets 1.8 Steps 2/21  
3.11.1.1. Classifying Solids and Nets

Can you identify each of these 3-D shapes? Use the shape to the name.



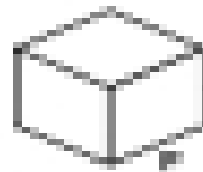

Cube

Cuboid




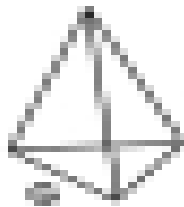
Square based  
Pyramid

Cone



Cylinder

Tetrahedron



Octagonal Prism

Hexagonal Prism