

Name : \_\_\_\_\_

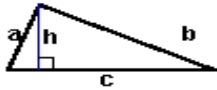
Score : \_\_\_\_\_

Teacher : \_\_\_\_\_

Date : \_\_\_\_\_

**Identify and Calculate the Area and Perimeter for each Triangle.**

1)



$a = 4.27$  ft     $b = 9.21$  ft  
 $c = 9.8$  ft     $h = 4$  ft

Area: \_\_\_\_\_

Perimeter: \_\_\_\_\_

Type: \_\_\_\_\_

2)



$a = 7.4$  inches     $b = 4.8$  inches  
 $c = 8.82$  inches

Area: \_\_\_\_\_

Perimeter: \_\_\_\_\_

Type: \_\_\_\_\_

3)



$a = 5.71$  mm     $b = 8.49$  mm  
 $c = 8.4$  mm     $h = 5.4$  mm

Area: \_\_\_\_\_

Perimeter: \_\_\_\_\_

Type: \_\_\_\_\_

4)



$s = 5.9$  yds

Area: \_\_\_\_\_

Perimeter: \_\_\_\_\_

Type: \_\_\_\_\_

5)



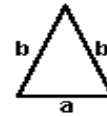
$a = 8.6$  ft     $b = 4.3$  ft  
 $c = 9.62$  ft

Area: \_\_\_\_\_

Perimeter: \_\_\_\_\_

Type: \_\_\_\_\_

6)



$a = 4.5$  cm     $b = 6.4$  cm

Area: \_\_\_\_\_

Perimeter: \_\_\_\_\_

Type: \_\_\_\_\_

7)



$a = 6.33$  yds     $b = 8.16$  yds  
 $c = 8.6$  yds     $h = 5.7$  yds

Area: \_\_\_\_\_

Perimeter: \_\_\_\_\_

Type: \_\_\_\_\_

8)



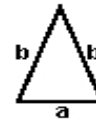
$a = 8.2$  cm     $b = 5$  cm  
 $c = 9.6$  cm

Area: \_\_\_\_\_

Perimeter: \_\_\_\_\_

Type: \_\_\_\_\_

9)



$a = 4$  inches     $b = 6.7$  inches

Area: \_\_\_\_\_

Perimeter: \_\_\_\_\_

Type: \_\_\_\_\_