


Name: \_\_\_\_\_


Draw and write the time that is **HALF PAST** the time given.

2:00




\_\_\_\_\_

11:00




\_\_\_\_\_

5:00



\_\_\_\_\_


9:00



\_\_\_\_\_

Draw and write the time that is **QUARTER AFTER** the time given.

8:00




\_\_\_\_\_

1:00




\_\_\_\_\_

10:00



\_\_\_\_\_


4:00



\_\_\_\_\_


Draw and write the time that is **QUARTER PAST** the time given.

6:00




\_\_\_\_\_

12:00




\_\_\_\_\_

3:00



\_\_\_\_\_

7:00



\_\_\_\_\_

Write the time.

Half past 4 \_\_\_\_\_

Quarter till 2 \_\_\_\_\_

Quarter after 1 \_\_\_\_\_

Quarter till 8 \_\_\_\_\_

Half past 12 \_\_\_\_\_

Quarter after 5 \_\_\_\_\_

Half past 3 \_\_\_\_\_

Quarter till 9 \_\_\_\_\_