






Name: _____

Time Patterns

Directions: Complete the time patterns.

1. **1:45** **2:45** **4:45**

2.     

3. _____, 36 hours, 48 hours, _____, 72 hours

4. 7:12 pm, 7:57 pm, _____, 9:27 pm, _____

5. 