








Name \_\_\_\_\_ Identifying simple machines

## It's Simply Simple Machines!

Simple machines make work easier for us.  
Look for examples of the simple machines labeled in the boxes.  
Write the examples that you find.



<p><b>Lever</b></p> 	<p><b>Wheel And Axle</b></p> 
<p><b>Pulley</b></p> 	<p><b>Inclined Plane</b></p> 
<p><b>Wedge</b></p> 	<p><b>Screw</b></p> 

**Bonus Box:** On the back of this paper, draw an example of each of these simple machines you found at home.