


What time is it?


Exercise 1: Write the time shown below each clock.




1. Quarter past 3




2.




3.



4.



5.



6.

Exercise 2: Write the digital times for each.

- Quarter past 8 _____ 8:15
- Five past 9 _____
- Ten to 4 _____
- Twenty five to 7 _____
- Twenty past 3 _____
- Half past 5 _____
- Quarter to 8 _____
- Twenty to 12 _____
- Ten past 10 _____
- 50 Past to 10 _____