





Name: \_\_\_\_\_

CCSS 2.NBT.1 Understand place value  
Primer, Prerequisite

### Place Value

Directions: Write how many tens and ones. Then write the number.

 __ tens __ ones __ + __ = __	 __ tens __ ones __ + __ = __
 __ tens __ ones __ + __ = __	 __ tens __ ones __ + __ = __
 __ tens __ ones __ + __ = __	 __ tens __ ones __ + __ = __