
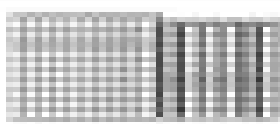




Name: \_\_\_\_\_ Date: \_\_\_\_\_

Which is more? Circle the number that is more.

 <p>2 hundreds, 1 ten, and 1 one (211)</p>	 <p>1 hundred, 1 ten, and 2 ones (112)</p>
 <p>1 hundred, 1 ten, and 1 one (111)</p>	 <p>1 hundred, 1 ten, and 1 one (111)</p>

Do you find a pattern?

How many 100's (hundreds) do you have in \_\_\_\_\_?

How many 10's (tens) do you have in \_\_\_\_\_?

How many 1's (ones) do you have in \_\_\_\_\_?

1. We compare first the \_\_\_\_\_.  
For example, 211 is less than 101, because 211 has two hundreds while 101 \_\_\_\_\_.
2. If the numbers have the same amount of hundreds,  
then we compare the \_\_\_\_\_.  
For example, 211 is greater than 101 because though it has the same amount  
of hundreds, it has more \_\_\_\_\_ than 101.
3. If the numbers have the same amount of hundreds AND the same amount