

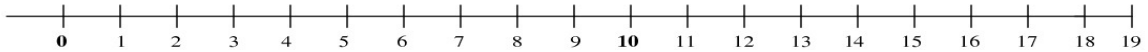
Name \_\_\_\_\_

CCSS 2.OA.2 Fluently add and subtract within 20 using mental strategies,.....

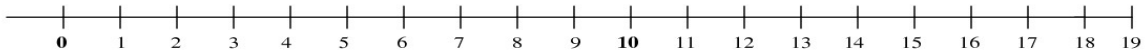
## Number Line Subtraction

⇒ Directions: Use the number line below to count back to subtract. Show your work on the number line.

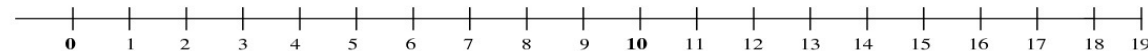
1)  $14 - 5 = \underline{\quad}$



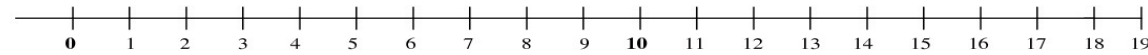
2)  $9 - 3 = \underline{\quad}$



3)  $12 - 8 = \underline{\quad}$



4)  $18 - 9 = \underline{\quad}$



5)  $7 - 4 = \underline{\quad}$

