











## Numbers (from 11 to 20)

 → <input type="text"/>
 → <input type="text"/>
 → <input type="text"/>
 → <input type="text"/>
 → <input type="text"/>
 → <input type="text"/>
 → <input type="text"/>
 → <input type="text"/>
 → <input type="text"/>
 → <input type="text" value="20"/>

- eleven
- twelve
- thirteen
- fourteen
- fifteen
- sixteen
- seventeen
- eighteen
- nineteen
- twenty

How many **balloons** are there? There are eleven balloons.

How many **balloons** are there? \_\_\_\_\_

How many **balloons** are there? \_\_\_\_\_

How many **balloons** are there? \_\_\_\_\_

How many **balloons** are there? \_\_\_\_\_